





MIRRORS REFLECTED IN MIRRORS

How the reflection of the reflection will be? What will we see in the mirror if the reflected shape is reflected again? Let's see it in number 5.

  **Draw**, in a blank sheet, what you think the result will be.

  **Draw**, then, the result, using the mirror.

Now you are going to see what happens after reflecting, and reflecting, and reflecting...

  **Place two mirrors** on the marked lines, opposite to each other. If you look at the mirror opposite you (you will have to crouch down for that), you will see reflected what is written, what is written, reflected what is written ... Is this the infinite?

E2P2E102 EN E2P2E102 REF2E102

YOU WILL NEED:

Two mirrors, a pencil and the activity sheet.